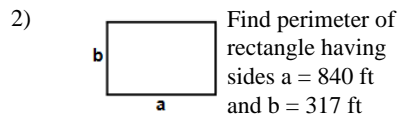
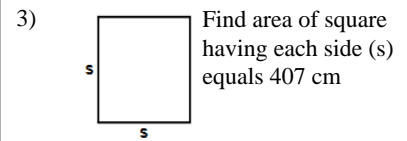


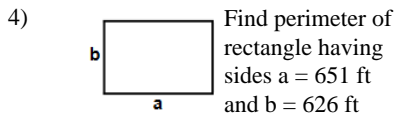
Answer: \_\_\_\_\_



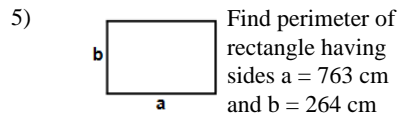
Answer: \_\_\_\_\_



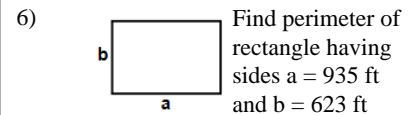
Answer: \_\_\_\_\_



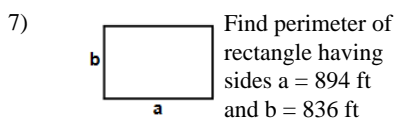
Answer: \_\_\_\_\_



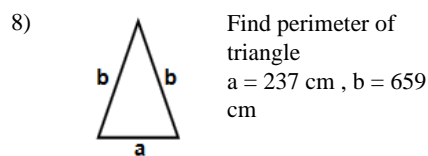
Answer: \_\_\_\_\_



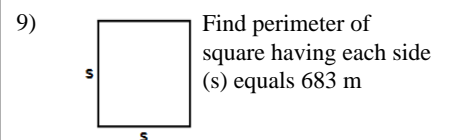
Answer: \_\_\_\_\_



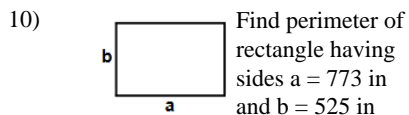
Answer: \_\_\_\_\_



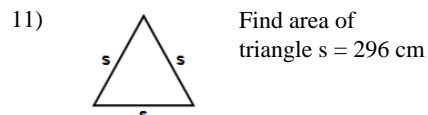
Answer: \_\_\_\_\_



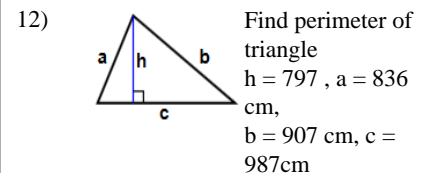
Answer: \_\_\_\_\_



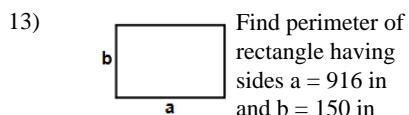
Answer: \_\_\_\_\_



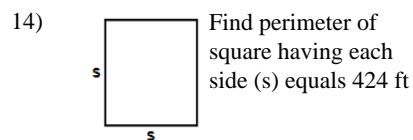
Answer: \_\_\_\_\_



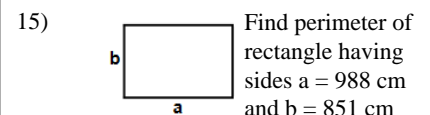
Answer: \_\_\_\_\_



Answer: \_\_\_\_\_



Answer: \_\_\_\_\_



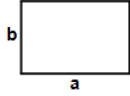
Answer: \_\_\_\_\_

Name: \_\_\_\_\_

April 22, 2018



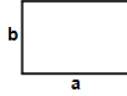
16)



Find perimeter of rectangle having sides  $a = 526$  cm and  $b = 241$  cm

Answer: \_\_\_\_\_

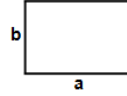
17)



Find area of rectangle having sides  $a = 781$  ft and  $b = 621$  ft

Answer: \_\_\_\_\_

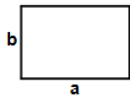
18)



Find perimeter of rectangle having sides  $a = 887$  m and  $b = 514$  m

Answer: \_\_\_\_\_

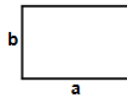
19)



Find perimeter of rectangle having sides  $a = 908$  ft and  $b = 667$  ft

Answer: \_\_\_\_\_

20)



Find area of rectangle having sides  $a = 983$  cm and  $b = 371$  cm

Answer: \_\_\_\_\_

**Total: \_\_\_\_ / 20**

Name: \_\_\_\_\_

Sr: 22042018-242

April 22, 2018

# MATHS WORKSHEET

GENERATOR

11-PLUS  
SATS  
GCSES



## Answers:

- |            |            |              |                       |            |              |            |
|------------|------------|--------------|-----------------------|------------|--------------|------------|
| 1) 1236in  | 2) 2314ft  | 3) 165649cm  | 4) 2554ft             | 5) 2054cm  | 6) 3116ft    | 7) 3460ft  |
| 8) 1555cm  | 9) 2732m   | 10) 2596in   | 11) 37938.840888989cm | 12) 2730cm | 13) 2132in   | 14) 1696ft |
| 15) 3678cm | 16) 1534cm | 17) 485001ft | 18) 2802m             | 19) 3150ft | 20) 364693cm |            |